

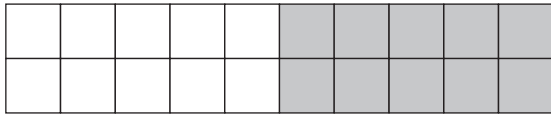


Name: _____

Datum: _____


Immer erst zur 10, dann weiter (mit +)

1. Zeichne und rechne!



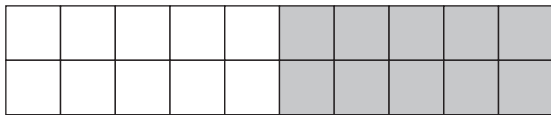
$$7 + 4 = \underline{\quad}$$

$$7 + \underline{\quad} + \underline{\quad} = \underline{\quad}$$



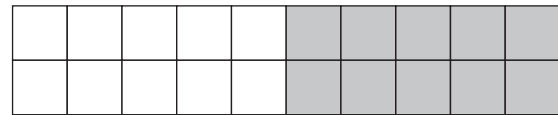
$$8 + 5 = \underline{\quad}$$

$$8 + \underline{\quad} + \underline{\quad} = \underline{\quad}$$



$$6 + 7 = \underline{\quad}$$

$$6 + \underline{\quad} + \underline{\quad} = \underline{\quad}$$



$$5 + 9 = \underline{\quad}$$

$$5 + \underline{\quad} + \underline{\quad} = \underline{\quad}$$

2. Zerlege und rechne!

$$\begin{array}{c} 6 + 5 = \square\square \\ \diagdown \quad \diagup \\ 6 + \square + \square = \square\square \end{array}$$

$$\begin{array}{c} 8 + 3 = \square\square \\ \diagdown \quad \diagup \\ 8 + \square + \square = \square\square \end{array}$$

$$\begin{array}{c} 7 + 5 = \square\square \\ \diagdown \quad \diagup \\ 7 + \square + \square = \square\square \end{array}$$

$$\begin{array}{c} 4 + 9 = \square\square \\ \diagdown \quad \diagup \\ \square + \square + \square = \square\square \end{array}$$

$$\begin{array}{c} 7 + 8 = \square\square \\ \diagdown \quad \diagup \\ \square + \square + \square = \square\square \end{array}$$

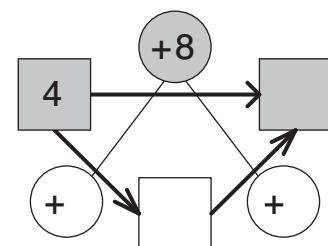
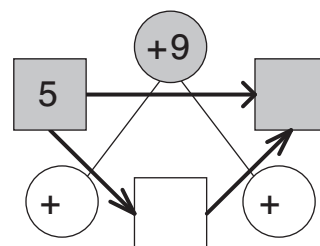
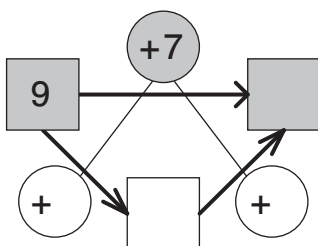
$$\begin{array}{c} 9 + 3 = \square\square \\ \diagdown \quad \diagup \\ \square + \square + \square = \square\square \end{array}$$

$$\begin{array}{c} 5 + 8 = \square\square \\ \diagdown \quad \diagup \\ \square + \square + \square = \square\square \end{array}$$

$$\begin{array}{c} 6 + 9 = \square\square \\ \diagdown \quad \diagup \\ \square + \square + \square = \square\square \end{array}$$

$$\begin{array}{c} 8 + 6 = \square\square \\ \diagdown \quad \diagup \\ \square + \square + \square = \square\square \end{array}$$

3. Zerlege und rechne!





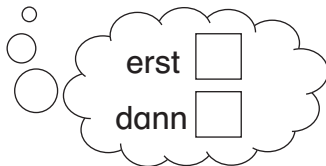
Name:

Datum:

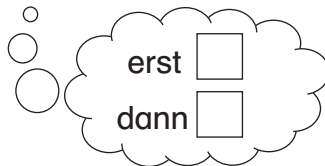
Immer erst zur 10, dann weiter (mit +)

1. Zerlege und rechne!

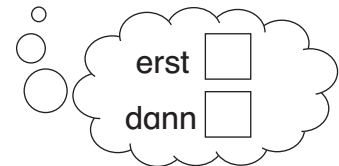
$7 + 5 = \square \square$



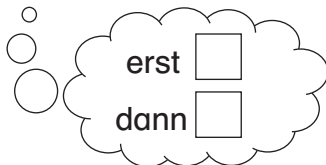
$5 + 9 = \square \square$



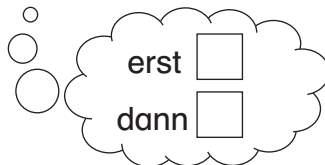
$6 + 7 = \square \square$



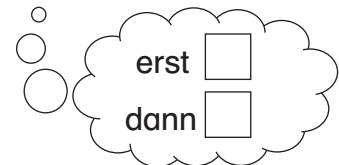
$8 + 7 = \square \square$



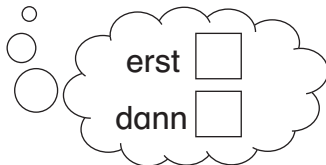
$6 + 5 = \square \square$



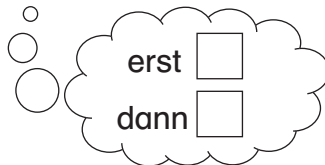
$7 + 4 = \square \square$



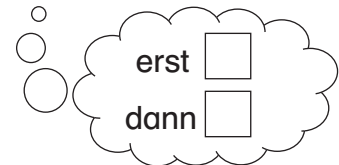
$4 + 9 = \square \square$



$9 + 6 = \square \square$

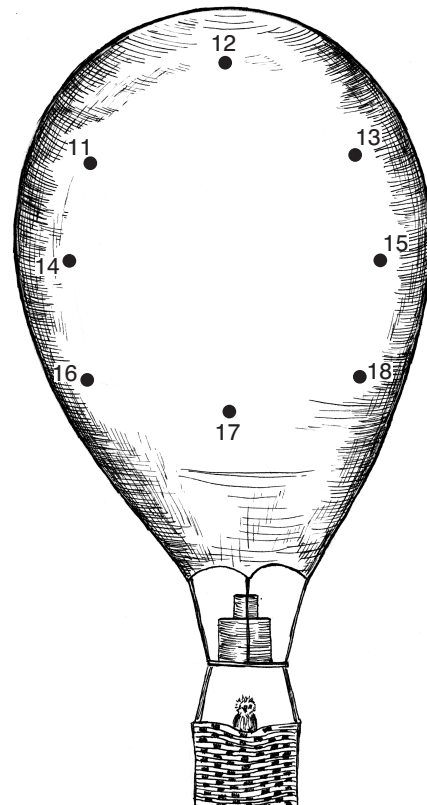


$8 + 5 = \square \square$



2. Zerlege im Kopf! – Rechne und kontrolliere!
Verbinde die Ergebnisse der Reihe nach!

7 + 6 =	□	□
6 + 8 =	□	□
9 + 9 =	□	□
8 + 7 =	□	□
9 + 4 =	□	□
5 + 7 =	□	□
8 + 3 =	□	□
6 + 9 =	□	□
8 + 8 =	□	□
9 + 5 =	□	□
5 + 6 =	□	□
9 + 8 =	□	□
8 + 5 =	□	□



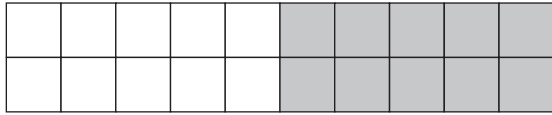


Name: _____

Datum: _____

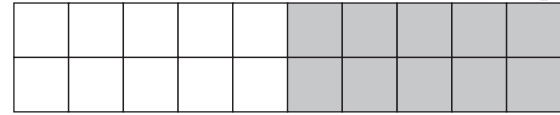
Immer erst zur 10, dann weiter (mit +)

Zeichne und rechne!



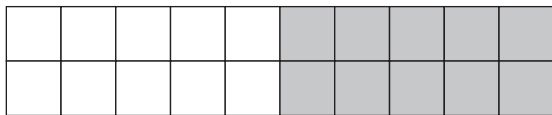
$$7 + 5 = \underline{\quad}$$

$$7 + \underline{\quad} + \underline{\quad} = \underline{\quad}$$




$$9 + 3 = \underline{\quad}$$

$$9 + \underline{\quad} + \underline{\quad} = \underline{\quad}$$




$$6 + 8 = \underline{\quad}$$

$$6 + \underline{\quad} + \underline{\quad} = \underline{\quad}$$




$$5 + 7 = \underline{\quad}$$

$$5 + \underline{\quad} + \underline{\quad} = \underline{\quad}$$



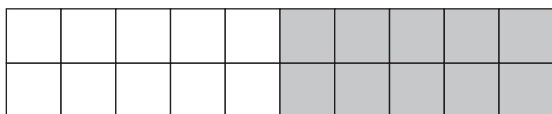
$$4 + 7 = \underline{\quad}$$

$$4 + \underline{\quad} + \underline{\quad} = \underline{\quad}$$




$$7 + 8 = \underline{\quad}$$

$$7 + \underline{\quad} + \underline{\quad} = \underline{\quad}$$



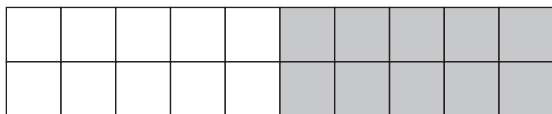
$$5 + 6 = \underline{\quad}$$

$$5 + \underline{\quad} + \underline{\quad} = \underline{\quad}$$




$$9 + 5 = \underline{\quad}$$

$$9 + \underline{\quad} + \underline{\quad} = \underline{\quad}$$



$$7 + 4 = \underline{\quad}$$

$$7 + \underline{\quad} + \underline{\quad} = \underline{\quad}$$



$$8 + 9 = \underline{\quad}$$

$$8 + \underline{\quad} + \underline{\quad} = \underline{\quad}$$



Name: Datum: **Immer erst zur 10, dann weiter (mit +)**

Zeichne, zerlege und rechne!

